


S'more numbers

Name: _____


Draw the matching number of dots in each ten frame.

5




A ten frame with 10 empty cells (2 rows of 5) for drawing 5 dots.

7




A ten frame with 10 empty cells (2 rows of 5) for drawing 7 dots.

2




A ten frame with 10 empty cells (2 rows of 5) for drawing 2 dots.

3




A ten frame with 10 empty cells (2 rows of 5) for drawing 3 dots.

9




A ten frame with 10 empty cells (2 rows of 5) for drawing 9 dots.

4




A ten frame with 10 empty cells (2 rows of 5) for drawing 4 dots.

8




A ten frame with 10 empty cells (2 rows of 5) for drawing 8 dots.

6



A ten frame with 10 empty cells (2 rows of 5) for drawing 6 dots.

10



A ten frame with 10 empty cells (2 rows of 5) for drawing 10 dots.